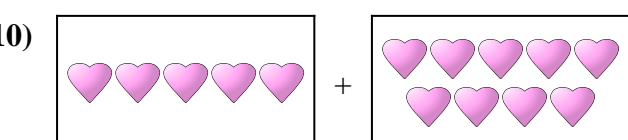
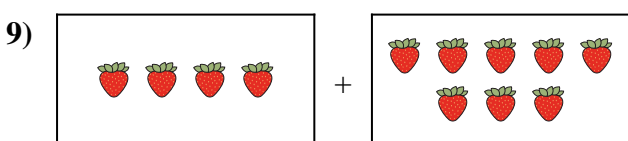
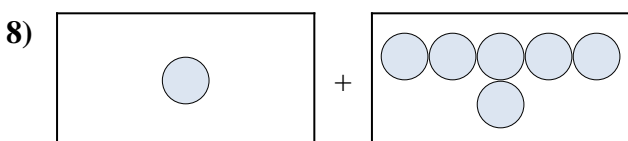
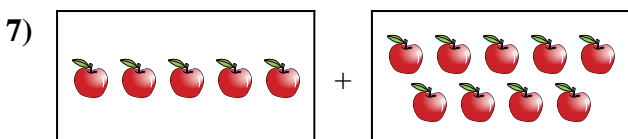

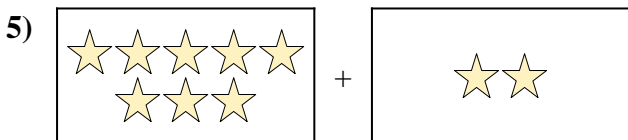
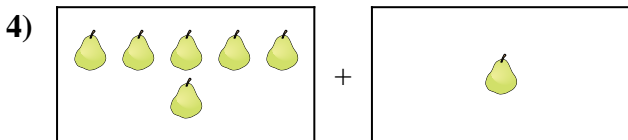
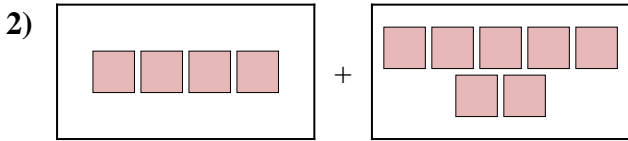
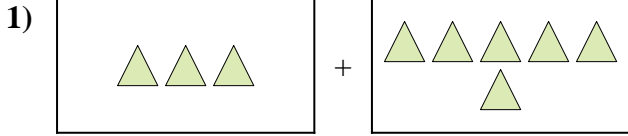




Express the visual problem as an equation with answer.

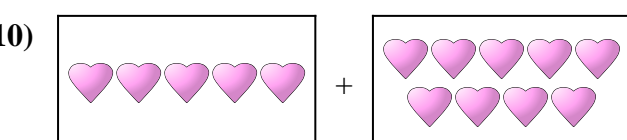
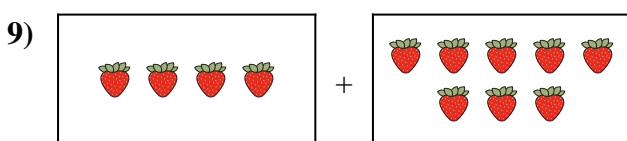
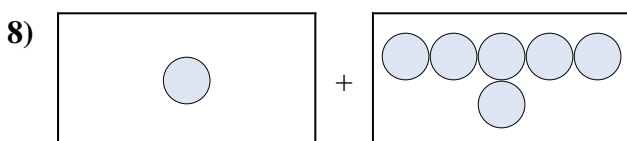
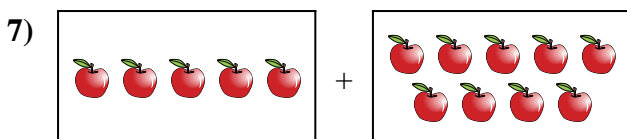

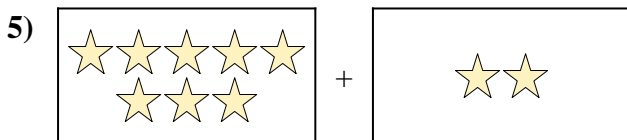
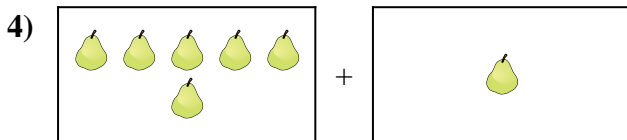
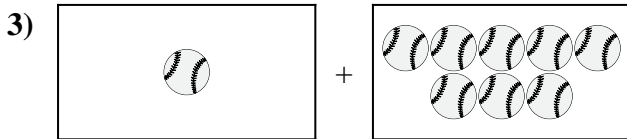
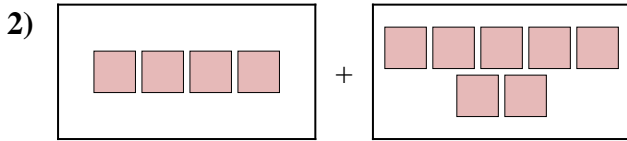
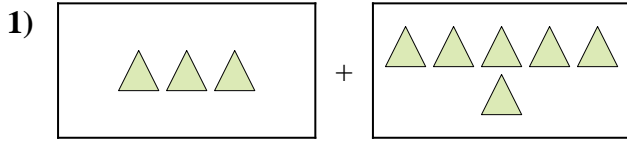
Answers



1. \_\_\_\_\_
2. \_\_\_\_\_
3. \_\_\_\_\_
4. \_\_\_\_\_
5. \_\_\_\_\_
6. \_\_\_\_\_
7. \_\_\_\_\_
8. \_\_\_\_\_
9. \_\_\_\_\_
10. \_\_\_\_\_



Express the visual problem as an equation with answer.



Answers

1.  $3 + 6 = 9$

2.  $4 + 7 = 11$

3.  $1 + 8 = 9$

4.  $6 + 1 = 7$

5.  $8 + 2 = 10$

6.  $10 + 9 = 19$

7.  $5 + 9 = 14$

8.  $1 + 6 = 7$

9.  $4 + 8 = 12$

10.  $5 + 9 = 14$